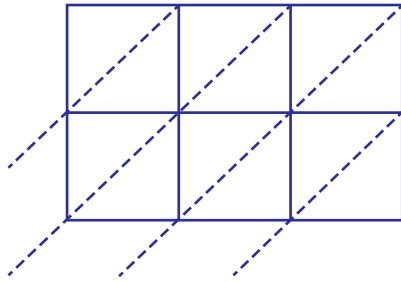


## Lattice Multiplication

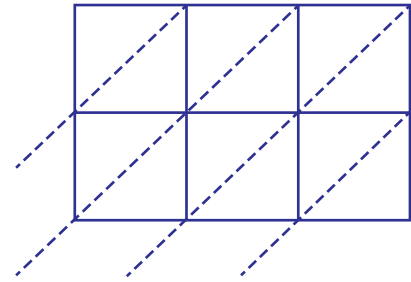
Use lattice multiplication method to find the product in each problem.

1)  $746 \times 49$



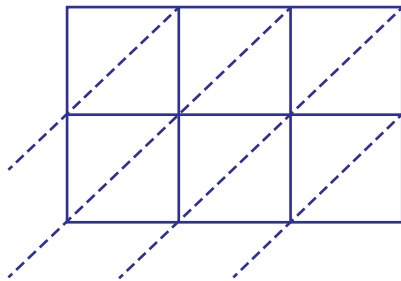
$746 \times 49 = \underline{\hspace{2cm}}$

2)  $561 \times 90$



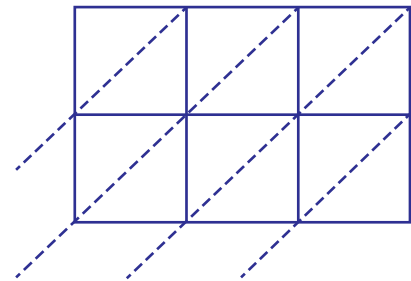
$561 \times 90 = \underline{\hspace{2cm}}$

3)  $160 \times 87$



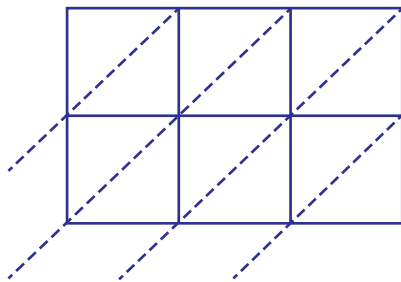
$160 \times 87 = \underline{\hspace{2cm}}$

4)  $972 \times 16$



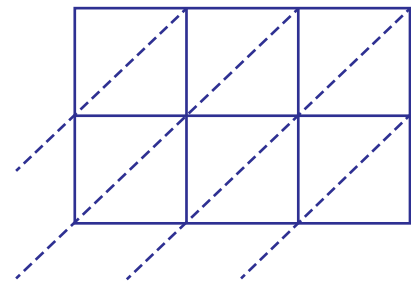
$972 \times 16 = \underline{\hspace{2cm}}$

5)  $448 \times 35$



$448 \times 35 = \underline{\hspace{2cm}}$

6)  $681 \times 58$

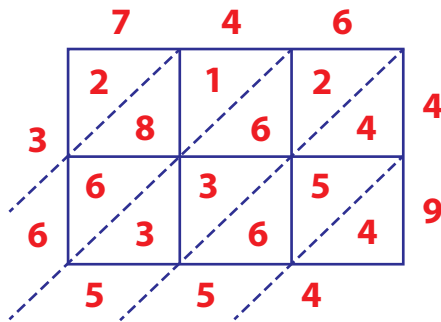


$681 \times 58 = \underline{\hspace{2cm}}$

**Answer Key****Lattice Multiplication**

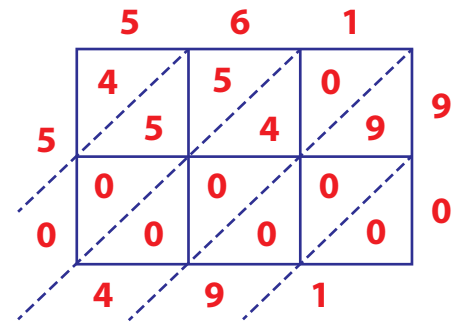
Use lattice multiplication method to find the product in each problem.

1)  $746 \times 49$



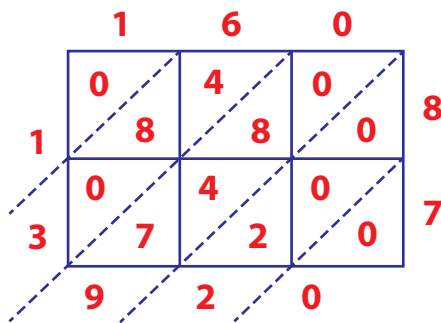
$746 \times 49 = \underline{36554}$

2)  $561 \times 90$



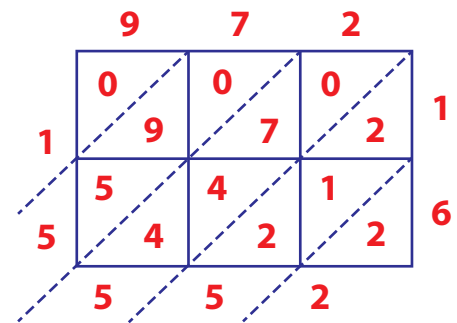
$561 \times 90 = \underline{50490}$

3)  $160 \times 87$



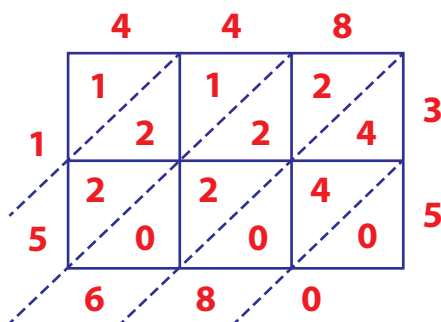
$160 \times 87 = \underline{13920}$

4)  $972 \times 16$



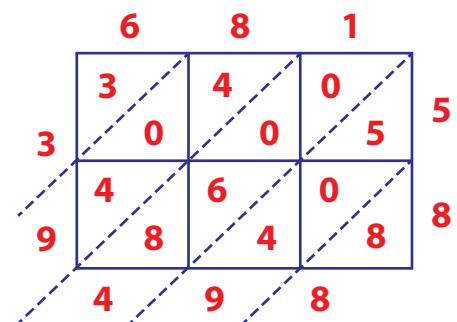
$972 \times 16 = \underline{15552}$

5)  $448 \times 35$



$448 \times 35 = \underline{15680}$

6)  $681 \times 58$



$681 \times 58 = \underline{39498}$